

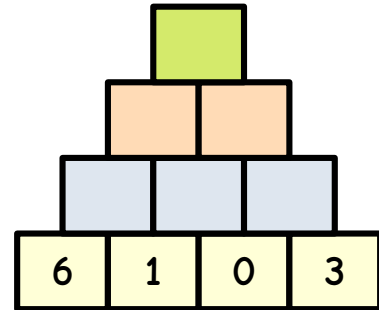
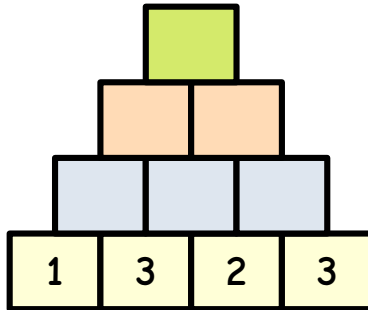
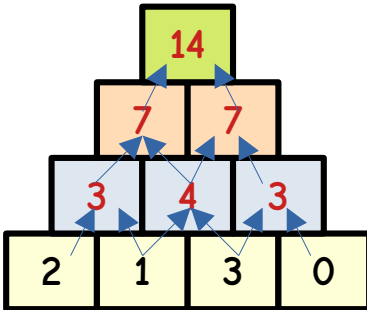
Name: _____

Datum: _____

Addition im Zahlenraum bis 20.

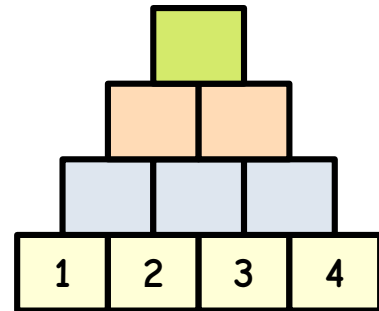
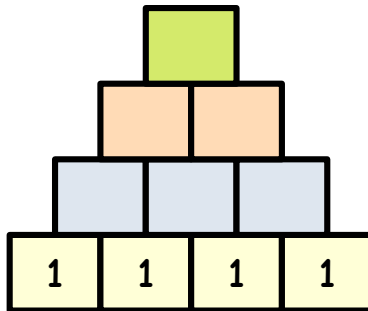
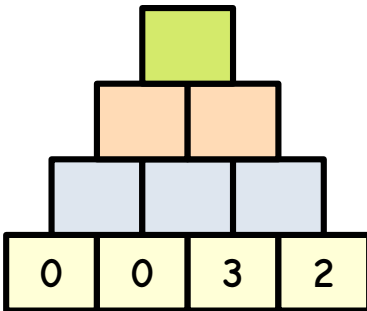
Übung 1: Rechne die Pyramide! (12 Punkte)

Punkte: : _____



Übung 2: Rechne die Pyramide! (16 Punkte)

Punkte: : _____



Übung 3: Rechne die Pyramide! (16 Punkte)

Punkte: : _____

