

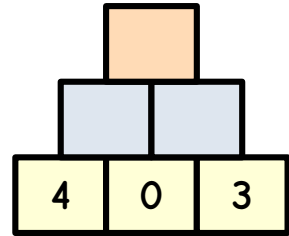
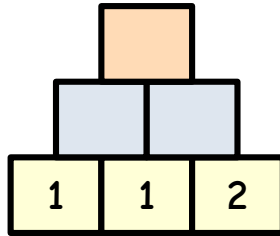
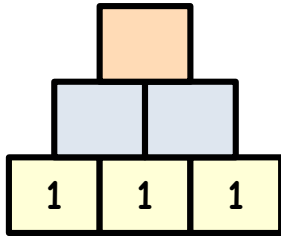
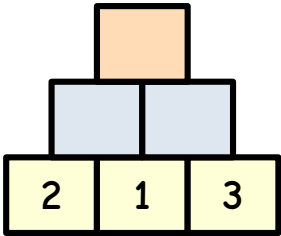
Name: _____

Datum: _____

Addition im Zahlenraum bis 10.

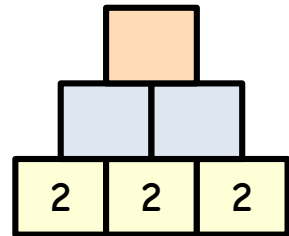
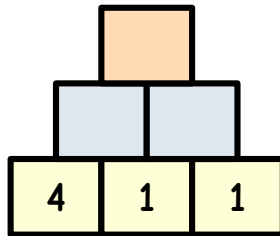
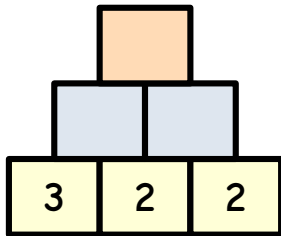
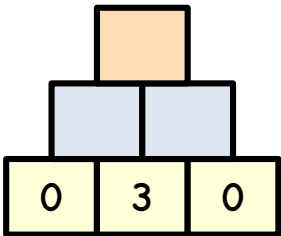
Übung 1: Rechne die Pyramide! (12 Punkte)

Punkte: : _____



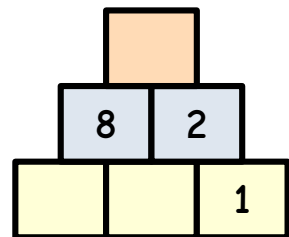
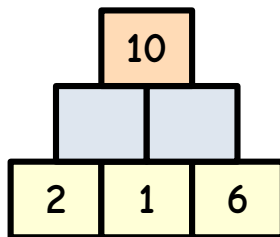
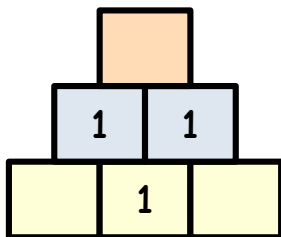
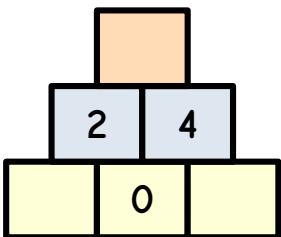
Übung 2: Rechne die Pyramide! (16 Punkte)

Punkte: : _____



Übung 3: Rechne die Pyramide! (11 Punkte)

Punkte: : _____



Übung 4: Rechne die Pyramide! (12 Punkte)

Punkte: : _____

